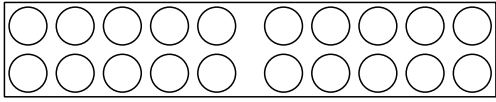
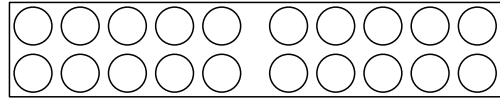


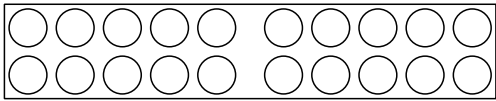
# Minusrechnungen im Zahlenraum 20 mit Unterschreitung Arbeitsblatt 1



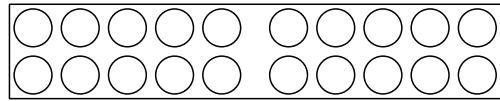
$$19 - 15 = \underline{\quad}$$



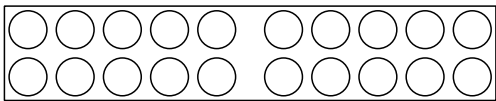
$$9 - 8 = \underline{\quad}$$



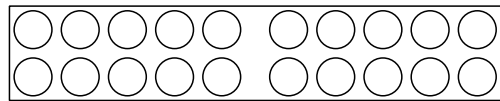
$$18 - 1 = \underline{\quad}$$



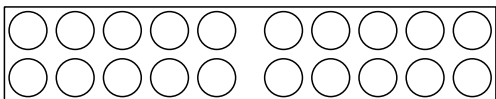
$$5 - 5 = \underline{\quad}$$



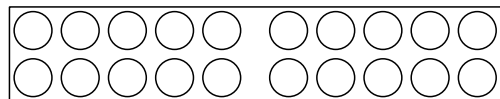
$$8 - 4 = \underline{\quad}$$



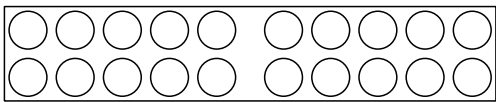
$$14 - 5 = \underline{\quad}$$



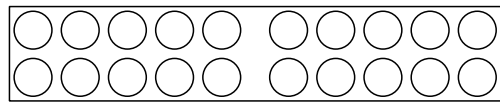
$$10 - 1 = \underline{\quad}$$



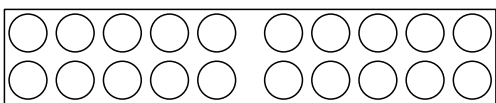
$$5 - 5 = \underline{\quad}$$



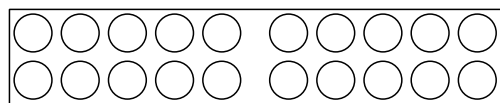
$$19 - 15 = \underline{\quad}$$



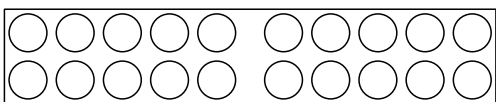
$$9 - 8 = \underline{\quad}$$



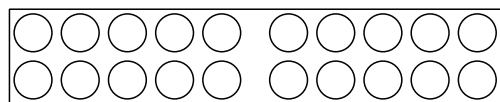
$$18 - 1 = \underline{\quad}$$




$$5 - 5 = \underline{\quad}$$



$$8 - 4 = \underline{\quad}$$

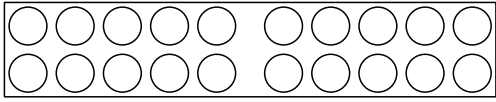


$$14 - 5 = \underline{\quad}$$

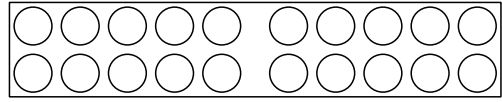


# Minusrechnungen im Zahlenraum 20 mit Unterschreitung

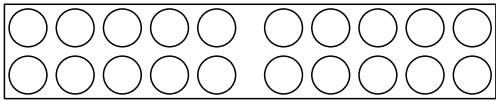
## Arbeitsblatt 2



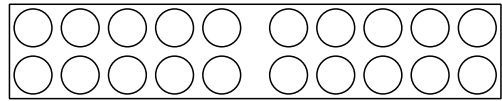
$$7 - 1 = \underline{\quad}$$



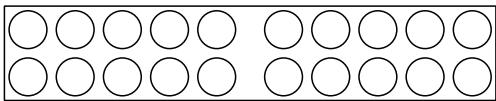
$$18 - 14 = \underline{\quad}$$



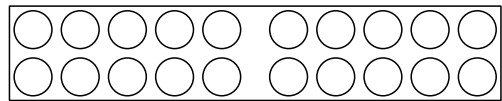
$$11 - 9 = \underline{\quad}$$



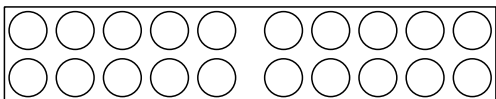
$$7 - 5 = \underline{\quad}$$



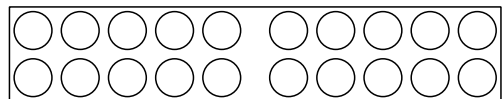
$$8 - 2 = \underline{\quad}$$



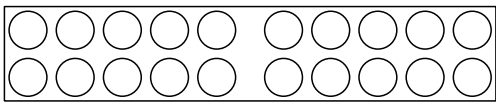
$$20 - 1 = \underline{\quad}$$



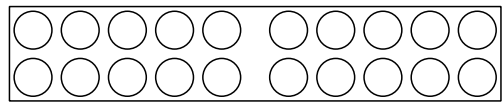
$$4 - 2 = \underline{\quad}$$



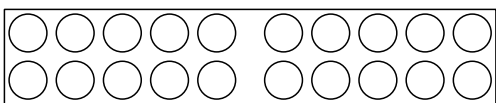
$$12 - 11 = \underline{\quad}$$



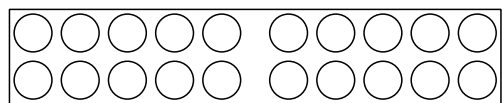
$$6 - 4 = \underline{\quad}$$



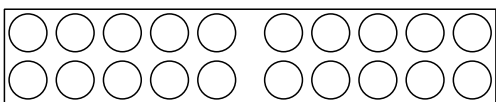
$$8 - 2 = \underline{\quad}$$



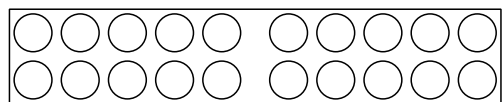
$$20 - 19 = \underline{\quad}$$




$$15 - 6 = \underline{\quad}$$



$$9 - 2 = \underline{\quad}$$

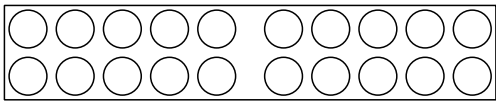


$$11 - 10 = \underline{\quad}$$

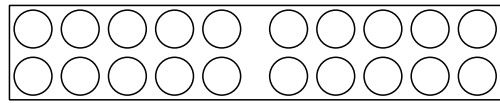


# Minusrechnungen im Zahlenraum 20 mit Unterschreitung

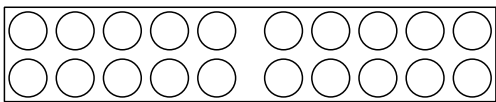
## Arbeitsblatt 3



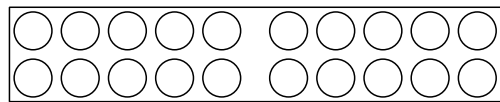
$$4 - 4 = \underline{\quad}$$



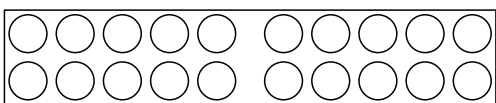
$$17 - 14 = \underline{\quad}$$



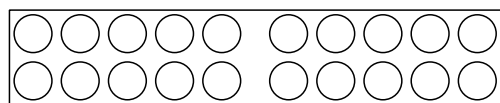
$$9 - 1 = \underline{\quad}$$



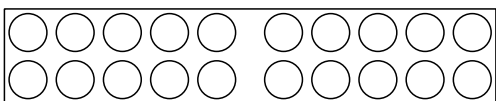
$$12 - 11 = \underline{\quad}$$



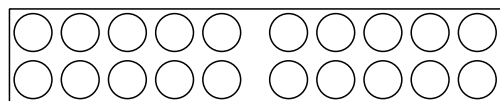
$$16 - 12 = \underline{\quad}$$



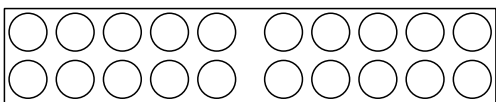
$$17 - 10 = \underline{\quad}$$



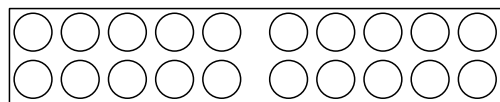
$$5 - 1 = \underline{\quad}$$



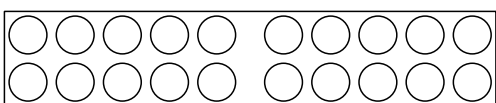
$$20 - 12 = \underline{\quad}$$



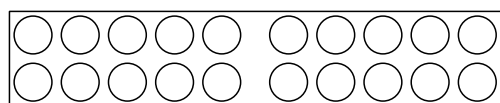
$$20 - 19 = \underline{\quad}$$



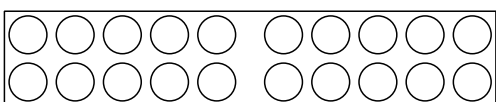
$$18 - 7 = \underline{\quad}$$



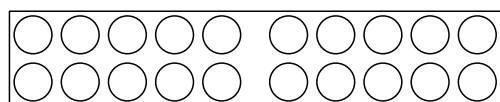
$$4 - 3 = \underline{\quad}$$




$$14 - 2 = \underline{\quad}$$



$$19 - 9 = \underline{\quad}$$

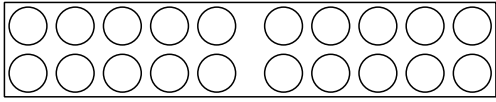


$$10 - 6 = \underline{\quad}$$

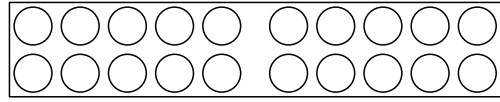


# Minusrechnungen im Zahlenraum 20 mit Unterschreitung

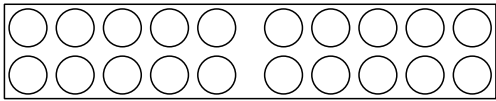
## Arbeitsblatt 4



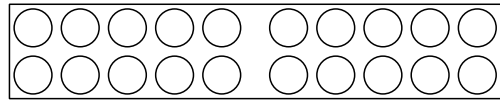
$$5 - 2 = \underline{\quad}$$



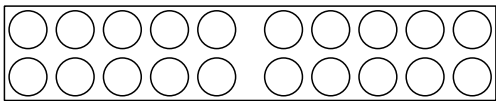
$$20 - 9 = \underline{\quad}$$



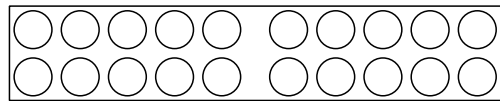
$$11 - 4 = \underline{\quad}$$



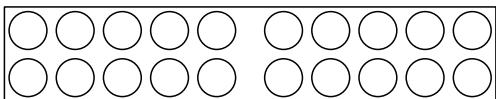
$$19 - 2 = \underline{\quad}$$



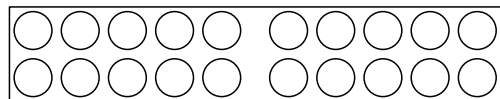
$$12 - 10 = \underline{\quad}$$



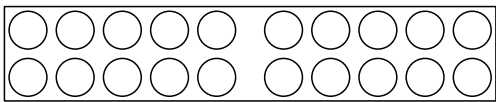
$$5 - 3 = \underline{\quad}$$



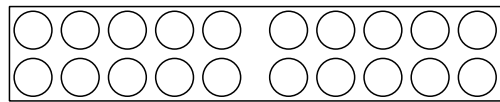
$$13 - 1 = \underline{\quad}$$



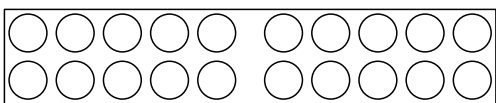
$$16 - 10 = \underline{\quad}$$



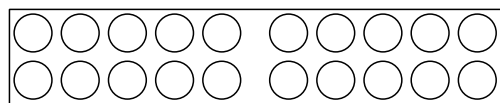
$$7 - 3 = \underline{\quad}$$



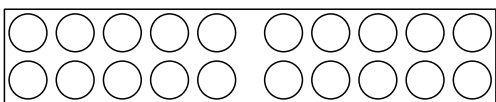
$$15 - 15 = \underline{\quad}$$



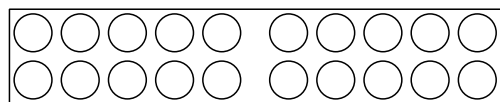
$$14 - 13 = \underline{\quad}$$



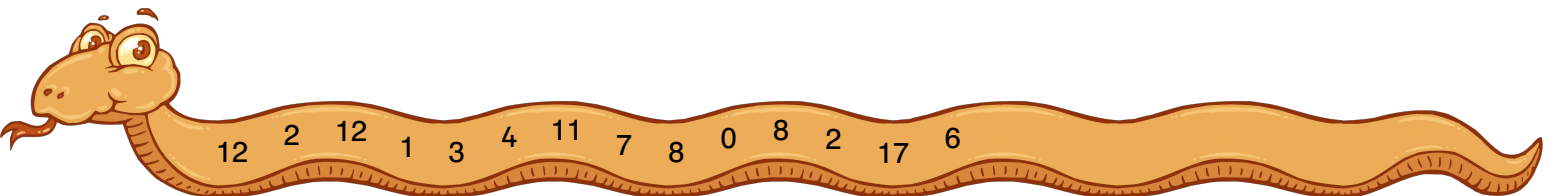
$$16 - 8 = \underline{\quad}$$



$$18 - 6 = \underline{\quad}$$

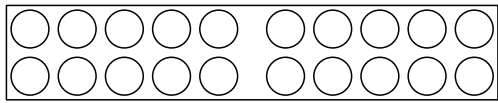


$$12 - 4 = \underline{\quad}$$

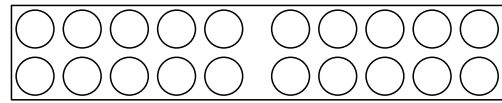


# Minusrechnungen im Zahlenraum 20 mit Unterschreitung

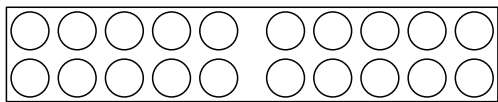
## Arbeitsblatt 5



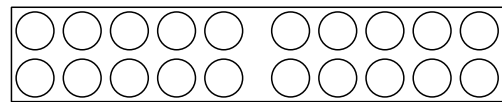
$$13 - 10 = \underline{\quad}$$



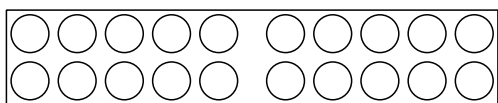
$$8 - 8 = \underline{\quad}$$



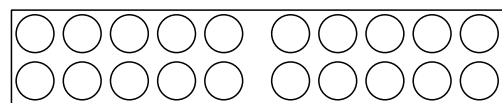
$$16 - 15 = \underline{\quad}$$



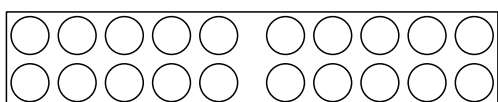
$$11 - 11 = \underline{\quad}$$



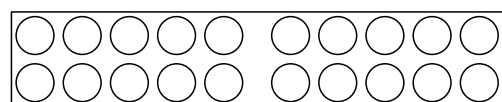
$$19 - 17 = \underline{\quad}$$



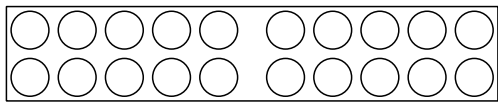
$$7 - 4 = \underline{\quad}$$



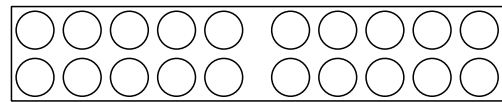
$$14 - 5 = \underline{\quad}$$



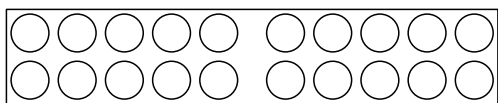
$$13 - 9 = \underline{\quad}$$



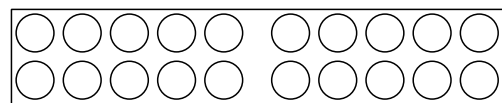
$$15 - 10 = \underline{\quad}$$



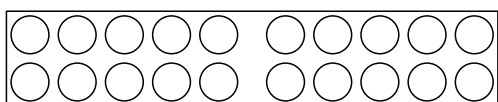
$$18 - 13 = \underline{\quad}$$



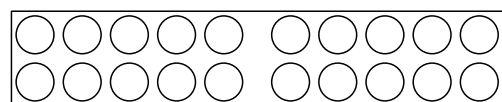
$$10 - 8 = \underline{\quad}$$




$$16 - 1 = \underline{\quad}$$



$$14 - 5 = \underline{\quad}$$

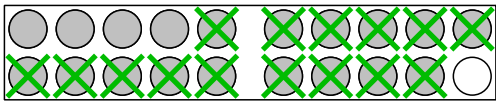


$$15 - 2 = \underline{\quad}$$

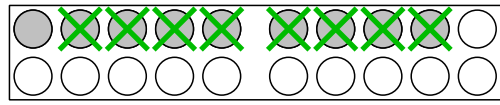


# Minusrechnungen im Zahlenraum 20 mit Unterschreitung

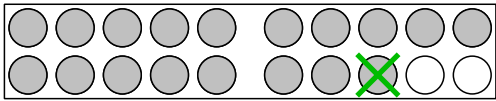
## Arbeitsblatt 1



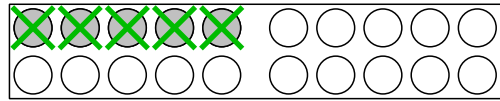
$$19 - 15 = \underline{4}$$



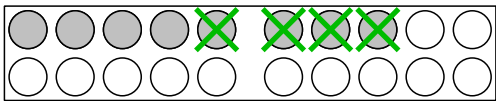
$$9 - 8 = \underline{1}$$



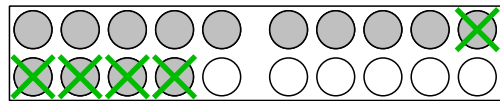
$$18 - 1 = \underline{17}$$



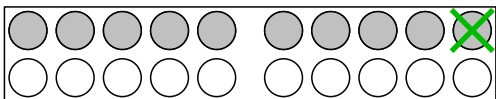
$$5 - 5 = \underline{0}$$



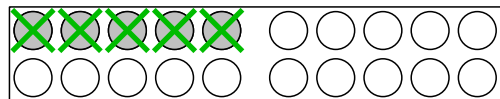
$$8 - 4 = \underline{4}$$



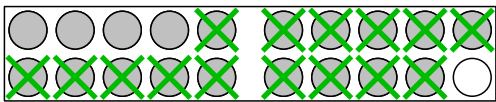
$$14 - 5 = \underline{9}$$



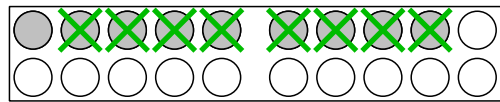
$$10 - 1 = \underline{9}$$



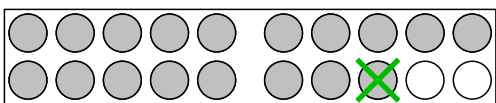
$$5 - 5 = \underline{0}$$



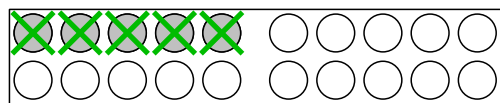
$$19 - 15 = \underline{4}$$



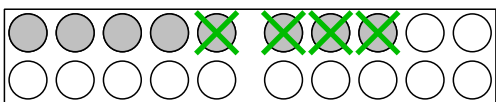
$$9 - 8 = \underline{1}$$



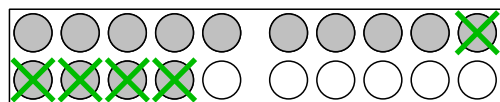
$$18 - 1 = \underline{17}$$




$$5 - 5 = \underline{0}$$



$$8 - 4 = \underline{4}$$

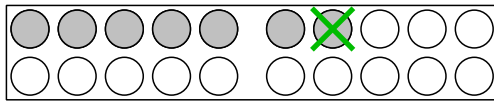


$$14 - 5 = \underline{9}$$

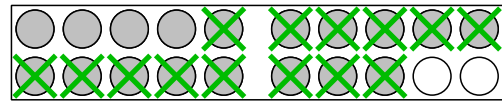


# Minusrechnungen im Zahlenraum 20 mit Unterschreitung

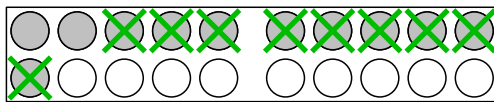
## Arbeitsblatt 2



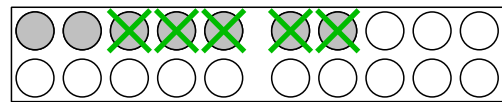
$$7 - 1 = \underline{6}$$



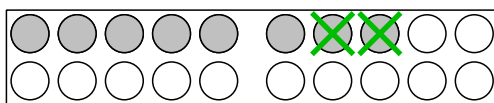
$$18 - 14 = \underline{4}$$



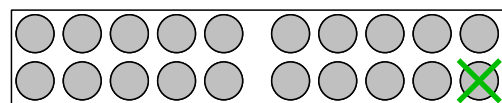
$$11 - 9 = \underline{2}$$



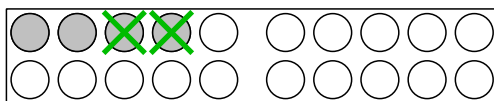
$$7 - 5 = \underline{2}$$



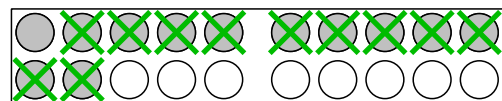
$$8 - 2 = \underline{6}$$



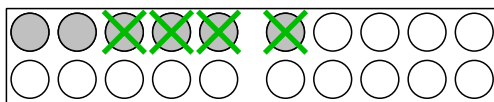
$$20 - 1 = \underline{19}$$



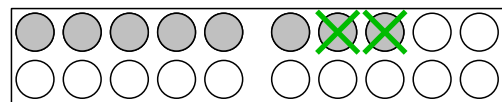
$$4 - 2 = \underline{2}$$



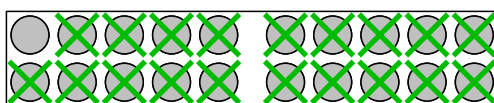
$$12 - 11 = \underline{1}$$



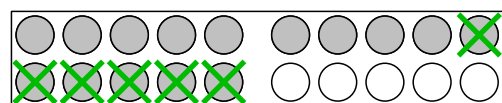
$$6 - 4 = \underline{2}$$



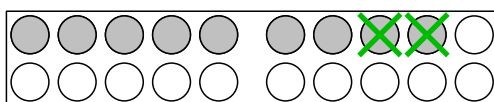
$$8 - 2 = \underline{6}$$



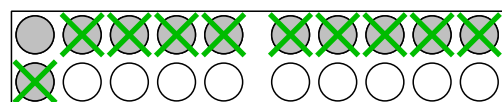
$$20 - 19 = \underline{1}$$




$$15 - 6 = \underline{9}$$



$$9 - 2 = \underline{7}$$

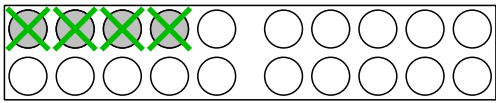


$$11 - 10 = \underline{1}$$

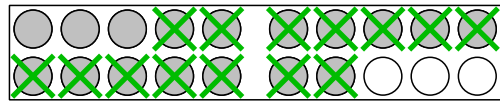


# Minusrechnungen im Zahlenraum 20 mit Unterschreitung

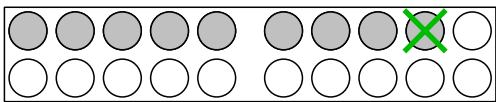
## Arbeitsblatt 3



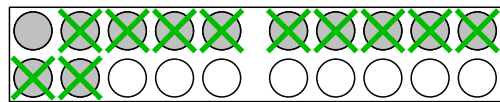
$$4 - 4 = \underline{0}$$



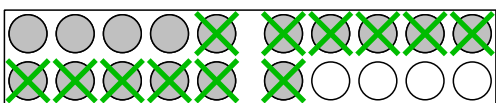
$$17 - 14 = \underline{3}$$



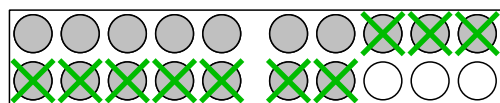
$$9 - 1 = \underline{8}$$



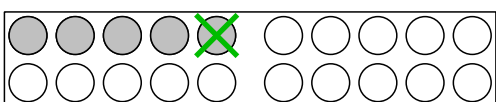
$$12 - 11 = \underline{1}$$



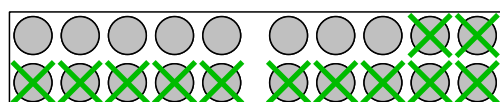
$$16 - 12 = \underline{4}$$



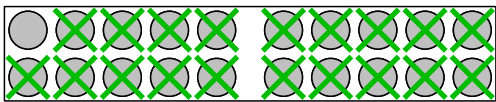
$$17 - 10 = \underline{7}$$



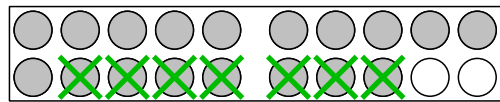
$$5 - 1 = \underline{4}$$



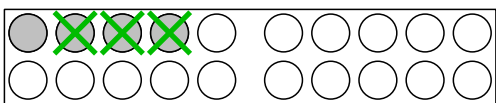
$$20 - 12 = \underline{8}$$



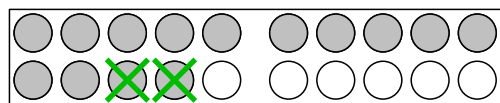
$$20 - 19 = \underline{1}$$



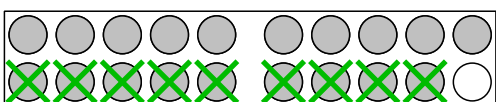
$$18 - 7 = \underline{11}$$



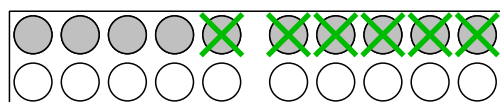
$$4 - 3 = \underline{1}$$




$$14 - 2 = \underline{12}$$



$$19 - 9 = \underline{10}$$



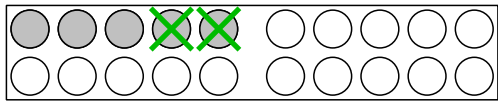
$$10 - 6 = \underline{4}$$



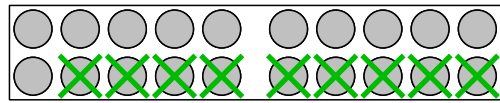


# Minusrechnungen im Zahlenraum 20 mit Unterschreitung

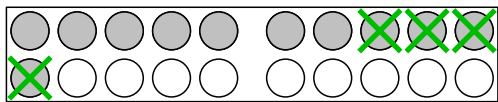
## Arbeitsblatt 4



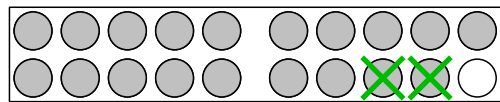
$$5 - 2 = \underline{3}$$



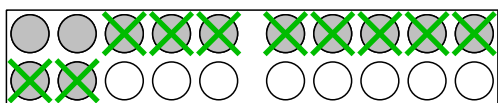
$$20 - 9 = \underline{11}$$



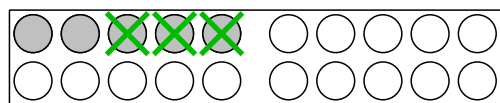
$$11 - 4 = \underline{7}$$



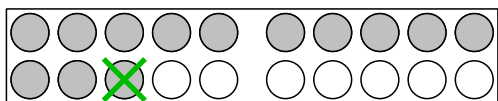
$$19 - 2 = \underline{17}$$



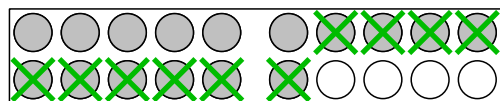
$$12 - 10 = \underline{2}$$



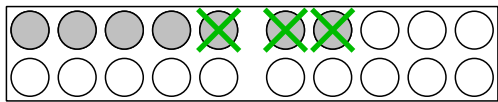
$$5 - 3 = \underline{2}$$



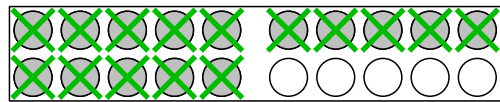
$$13 - 1 = \underline{12}$$



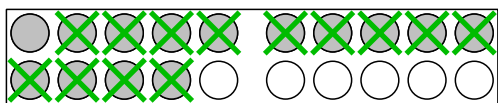
$$16 - 10 = \underline{6}$$



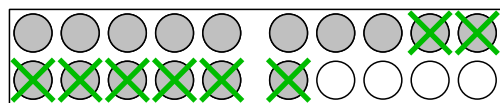
$$7 - 3 = \underline{4}$$



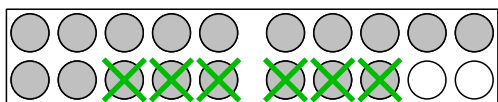
$$15 - 15 = \underline{0}$$



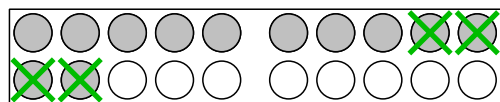
$$14 - 13 = \underline{1}$$



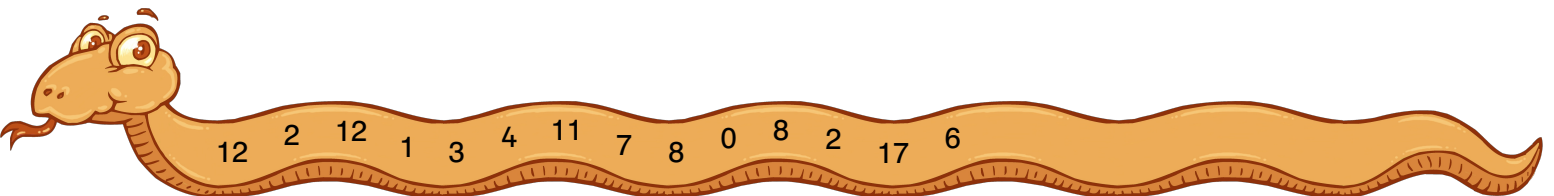
$$16 - 8 = \underline{8}$$



$$18 - 6 = \underline{12}$$

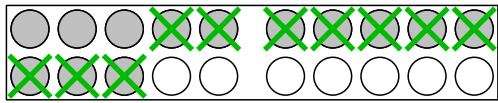


$$12 - 4 = \underline{8}$$

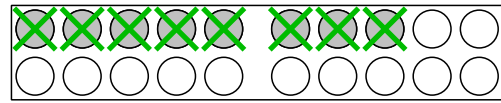


# Minusrechnungen im Zahlenraum 20 mit Unterschreitung

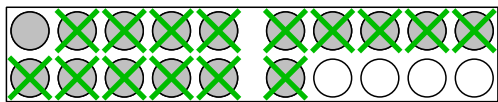
## Arbeitsblatt 5



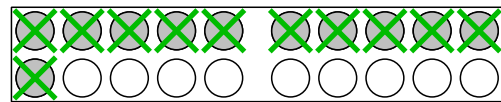
$$13 - 10 = \underline{3}$$



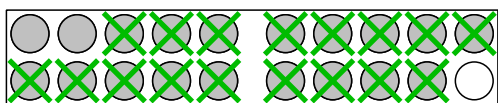
$$8 - 8 = \underline{0}$$



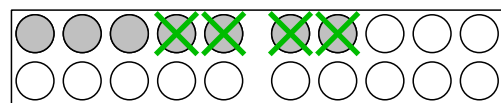
$$16 - 15 = \underline{1}$$



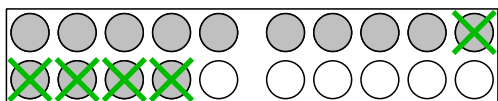
$$11 - 11 = \underline{0}$$



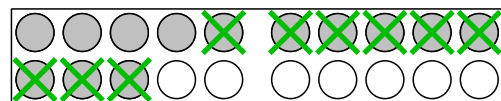
$$19 - 17 = \underline{2}$$



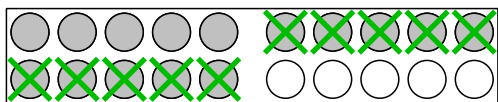
$$7 - 4 = \underline{3}$$



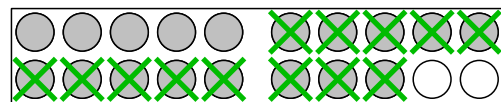
$$14 - 5 = \underline{9}$$



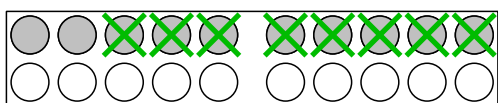
$$13 - 9 = \underline{4}$$



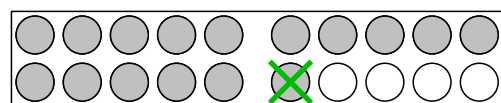
$$15 - 10 = \underline{5}$$



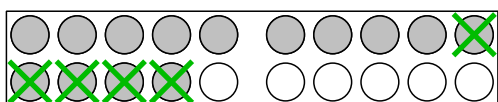
$$18 - 13 = \underline{5}$$



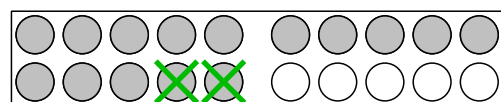
$$10 - 8 = \underline{2}$$



$$16 - 1 = \underline{15}$$



$$14 - 5 = \underline{9}$$



$$15 - 2 = \underline{13}$$

